





Costings and change


Grp 2


1.  Burgers usually cost £1.50 each. How much will 2 burgers cost?
2. How much change will there be out of £5.00?

3.  Oranges cost 50p each. How much will I pay for 10 oranges?
4. How much change will there be out of £10.00?

5.  Crisps usually cost 80p a bag. How much will I pay for 6 bags?
6. How much change will I get from £5.00?

7.  Apples usually cost £2.00 a kilogram. How much will I pay for 6 kilograms?
8. What will be the change from £20.00?

9.  Biscuits usually cost £1.20 a packet. How much will 3 packets of biscuits cost?
10. What will the change be from £5.00?

11.  Chocolate bars usually cost 90p each. How much will 9 bars cost?
12. What will the change be from £10.00?

13. Easter Eggs usually cost £2.50 each. How much will 4 cost?
14. How much change from £20?